


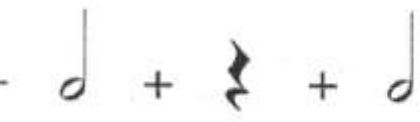
Year 7 Homework

/10

Name _____ Teaching Group _____

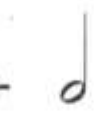
Work out **HOW MANY BEATS** there are in each of these **10 MUSICAL SUMS**. Add up (+) or subtracts {take away}(-) the value of the notes shown. Write your answer on the line, in the box.

1  = beats

2  = beats

3  = beats

4  = beats

5  = beats



6 = beats



7 = beats



8 = beats

9 = beats

10 = beats

 or  = 1

 or  = 2

 or  = 4